

### Answers

1 How many cookies are there?

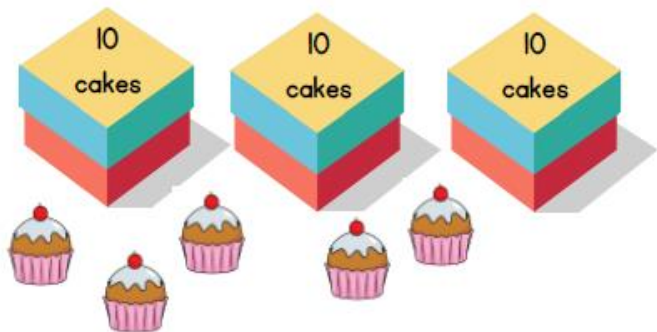


14



1 mark

How many cakes are there altogether?

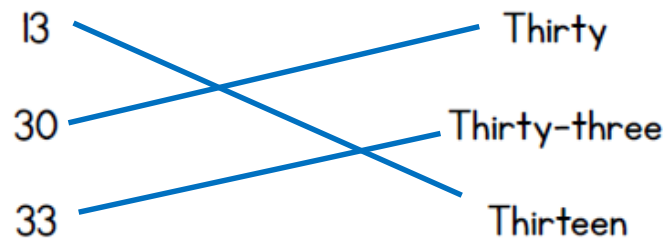


35



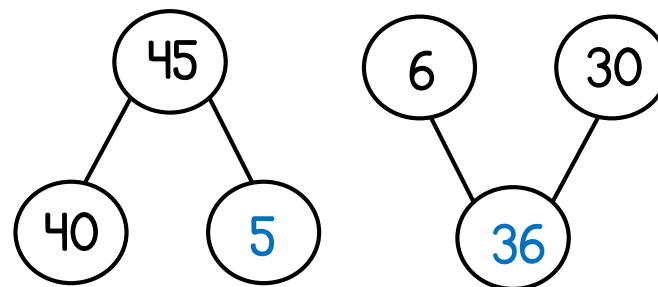
1 mark

2 Match the numerals to the correct word.



1 mark

3 Complete the part-whole models.



2 marks

4 Circle the greatest number.

18    27    33    19    23



1 mark

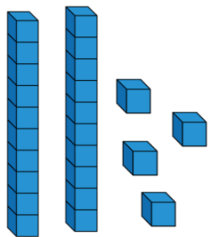
- 5 Complete the boxes to make the statements correct.

1 more than 35 is

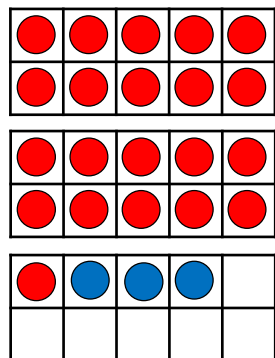
10 less than  is 72

- 6 Draw more counters on the ten frame so that Eva's number and Jack's number are equal.

Eva's number

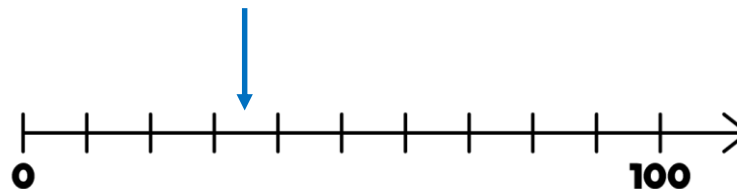


Jack's number




2 marks

- 7 Draw an arrow to show 35 on the number line.




1 mark

- 8 Which word completes the sentence correctly?

more      less

3 tens is less than 2 tens and 12 ones.

1 mark

Write a number to make the statement correct. Any number more than 32 and less than 40.

$32 < \square < 40$

1 mark

1 mark

Circle how confident you feel with place value.

1      2      3      4      5  
Not      Very  
confident      confident